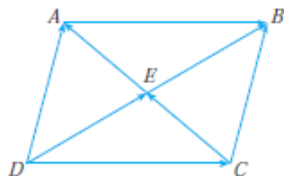
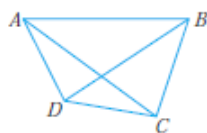


## 12.2 Exercises

- Are the following quantities vectors or scalars? Explain.
  - The cost of a theater ticket
  - The current in a river
  - The initial flight path from Houston to Dallas
  - The population of the world
- What is the relationship between the point  $(4, 7)$  and the vector  $\langle 4, 7 \rangle$ ? Illustrate with a sketch.
- Name all the equal vectors in the parallelogram shown.



- Write each combination of vectors as a single vector.
  - $\vec{AB} + \vec{BC}$
  - $\vec{CD} + \vec{DB}$
  - $\vec{DB} - \vec{AB}$
  - $\vec{DC} + \vec{CA} + \vec{AB}$



- Copy the vectors in the figure and use them to draw the following vectors.

- $\mathbf{u} + \mathbf{v}$
- $\mathbf{u} + \mathbf{w}$
- $\mathbf{v} + \mathbf{w}$
- $\mathbf{u} - \mathbf{v}$
- $\mathbf{v} + \mathbf{u} + \mathbf{w}$
- $\mathbf{u} - \mathbf{w} - \mathbf{v}$

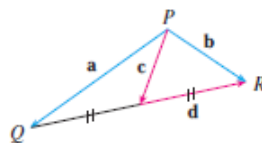


- Copy the vectors in the figure and use them to draw the following vectors.

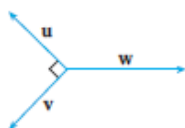
- $\mathbf{a} + \mathbf{b}$
- $\mathbf{a} - \mathbf{b}$
- $\frac{1}{2}\mathbf{a}$
- $-3\mathbf{b}$
- $\mathbf{a} + 2\mathbf{b}$
- $2\mathbf{b} - \mathbf{a}$



- In the figure, the tip of  $\mathbf{c}$  and the tail of  $\mathbf{d}$  are both the midpoint of  $QR$ . Express  $\mathbf{c}$  and  $\mathbf{d}$  in terms of  $\mathbf{a}$  and  $\mathbf{b}$ .



8. If the vectors in the figure satisfy  $|\mathbf{u}| = |\mathbf{v}| = 1$  and  $\mathbf{u} + \mathbf{v} + \mathbf{w} = \mathbf{0}$ , what is  $|\mathbf{w}|$ ?



9–14 Find a vector  $\mathbf{a}$  with representation given by the directed line segment  $\overrightarrow{AB}$ . Draw  $\overrightarrow{AB}$  and the equivalent representation starting at the origin.

9.  $A(-1, 1)$ ,  $B(3, 2)$       10.  $A(-4, -1)$ ,  $B(1, 2)$   
 11.  $A(-1, 3)$ ,  $B(2, 2)$       12.  $A(2, 1)$ ,  $B(0, 6)$   
 13.  $A(0, 3, 1)$ ,  $B(2, 3, -1)$       14.  $A(4, 0, -2)$ ,  $B(4, 2, 1)$

15–18 Find the sum of the given vectors and illustrate geometrically.

15.  $\langle -1, 4 \rangle$ ,  $\langle 6, -2 \rangle$       16.  $\langle 3, -1 \rangle$ ,  $\langle -1, 5 \rangle$   
 17.  $\langle 3, 0, 1 \rangle$ ,  $\langle 0, 8, 0 \rangle$       18.  $\langle 1, 3, -2 \rangle$ ,  $\langle 0, 0, 6 \rangle$

19–22 Find  $\mathbf{a} + \mathbf{b}$ ,  $2\mathbf{a} + 3\mathbf{b}$ ,  $|\mathbf{a}|$ , and  $|\mathbf{a} - \mathbf{b}|$ .

19.  $\mathbf{a} = \langle 5, -12 \rangle$ ,  $\mathbf{b} = \langle -3, -6 \rangle$   
 20.  $\mathbf{a} = 4\mathbf{i} + \mathbf{j}$ ,  $\mathbf{b} = \mathbf{i} - 2\mathbf{j}$   
 21.  $\mathbf{a} = \mathbf{i} + 2\mathbf{j} - 3\mathbf{k}$ ,  $\mathbf{b} = -2\mathbf{i} - \mathbf{j} + 5\mathbf{k}$   
 22.  $\mathbf{a} = 2\mathbf{i} - 4\mathbf{j} + 4\mathbf{k}$ ,  $\mathbf{b} = 2\mathbf{j} - \mathbf{k}$

23–25 Find a unit vector that has the same direction as the given vector.

23.  $-3\mathbf{i} + 7\mathbf{j}$       24.  $\langle -4, 2, 4 \rangle$   
 25.  $8\mathbf{i} - \mathbf{j} + 4\mathbf{k}$

26. Find a vector that has the same direction as  $\langle -2, 4, 2 \rangle$  but has length 6.

27–28 What is the angle between the given vector and the positive direction of the  $x$ -axis?

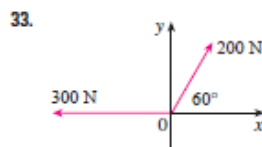
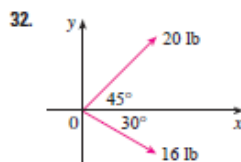
27.  $\mathbf{i} + \sqrt{3}\mathbf{j}$       28.  $8\mathbf{i} + 6\mathbf{j}$

29. If  $\mathbf{v}$  lies in the first quadrant and makes an angle  $\pi/3$  with the positive  $x$ -axis and  $|\mathbf{v}| = 4$ , find  $\mathbf{v}$  in component form.

30. If a child pulls a sled through the snow on a level path with a force of 50 N exerted at an angle of  $38^\circ$  above the horizontal, find the horizontal and vertical components of the force.

31. A quarterback throws a football with angle of elevation  $40^\circ$  and speed 60 ft/s. Find the horizontal and vertical components of the velocity vector.

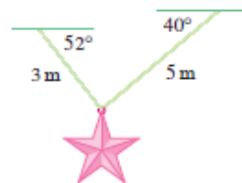
32–33 Find the magnitude of the resultant force and the angle it makes with the positive  $x$ -axis.



34. The magnitude of a velocity vector is called *speed*. Suppose that a wind is blowing from the direction  $N45^\circ W$  at a speed of 50 km/h. (This means that the direction from which the wind blows is  $45^\circ$  west of the northerly direction.) A pilot is steering a plane in the direction  $N60^\circ E$  at an airspeed (speed in still air) of 250 km/h. The *true course*, or *track*, of the plane is the direction of the resultant of the velocity vectors of the plane and the wind. The *ground speed* of the plane is the magnitude of the resultant. Find the true course and the ground speed of the plane.

35. A woman walks due west on the deck of a ship at 3 mi/h. The ship is moving north at a speed of 22 mi/h. Find the speed and direction of the woman relative to the surface of the water.

36. Ropes 3 m and 5 m in length are fastened to a holiday decoration that is suspended over a town square. The decoration has a mass of 5 kg. The ropes, fastened at different heights, make angles of  $52^\circ$  and  $40^\circ$  with the horizontal. Find the tension in each wire and the magnitude of each tension.



37. A clothesline is tied between two poles, 8 m apart. The line is quite taut and has negligible sag. When a wet shirt with a mass of 0.8 kg is hung at the middle of the line, the midpoint is pulled down 8 cm. Find the tension in each half of the clothesline.

38. The tension  $T$  at each end of the chain has magnitude 25 N (see the figure). What is the weight of the chain?



39. A boatman wants to cross a canal that is 3 km wide and wants to land at a point 2 km upstream from his starting point. The current in the canal flows at 3.5 km/h and the speed of his boat is 13 km/h.

- (a) In what direction should he steer?  
 (b) How long will the trip take?

40. Three forces act on an object. Two of the forces are at an angle of  $100^\circ$  to each other and have magnitudes 25 N and 12 N. The third is perpendicular to the plane of these two forces and has magnitude 4 N. Calculate the magnitude of the force that would exactly counterbalance these three forces.
41. Find the unit vectors that are parallel to the tangent line to the parabola  $y = x^2$  at the point  $(2, 4)$ .
42. (a) Find the unit vectors that are parallel to the tangent line to the curve  $y = 2 \sin x$  at the point  $(\pi/6, 1)$ .  
 (b) Find the unit vectors that are perpendicular to the tangent line.  
 (c) Sketch the curve  $y = 2 \sin x$  and the vectors in parts (a) and (b), all starting at  $(\pi/6, 1)$ .
43. If  $A$ ,  $B$ , and  $C$  are the vertices of a triangle, find  $\vec{AB} + \vec{BC} + \vec{CA}$ .
44. Let  $C$  be the point on the line segment  $AB$  that is twice as far from  $B$  as it is from  $A$ . If  $\mathbf{a} = \vec{OA}$ ,  $\mathbf{b} = \vec{OB}$ , and  $\mathbf{c} = \vec{OC}$ , show that  $\mathbf{c} = \frac{2}{3}\mathbf{a} + \frac{1}{3}\mathbf{b}$ .
45. (a) Draw the vectors  $\mathbf{a} = \langle 3, 2 \rangle$ ,  $\mathbf{b} = \langle 2, -1 \rangle$ , and  $\mathbf{c} = \langle 7, 1 \rangle$ .  
 (b) Show, by means of a sketch, that there are scalars  $s$  and  $t$  such that  $\mathbf{c} = s\mathbf{a} + t\mathbf{b}$ .  
 (c) Use the sketch to estimate the values of  $s$  and  $t$ .  
 (d) Find the exact values of  $s$  and  $t$ .
46. Suppose that  $\mathbf{a}$  and  $\mathbf{b}$  are nonzero vectors that are not parallel and  $\mathbf{c}$  is any vector in the plane determined by  $\mathbf{a}$  and  $\mathbf{b}$ . Give a geometric argument to show that  $\mathbf{c}$  can be written as  $\mathbf{c} = s\mathbf{a} + t\mathbf{b}$  for suitable scalars  $s$  and  $t$ . Then give an argument using components.
47. If  $\mathbf{r} = \langle x, y, z \rangle$  and  $\mathbf{r}_0 = \langle x_0, y_0, z_0 \rangle$ , describe the set of all points  $(x, y, z)$  such that  $|\mathbf{r} - \mathbf{r}_0| = 1$ .
48. If  $\mathbf{r} = \langle x, y \rangle$ ,  $\mathbf{r}_1 = \langle x_1, y_1 \rangle$ , and  $\mathbf{r}_2 = \langle x_2, y_2 \rangle$ , describe the set of all points  $(x, y)$  such that  $|\mathbf{r} - \mathbf{r}_1| + |\mathbf{r} - \mathbf{r}_2| = k$ , where  $k > |\mathbf{r}_1 - \mathbf{r}_2|$ .
49. Figure 16 gives a geometric demonstration of Property 2 of vectors. Use components to give an algebraic proof of this fact for the case  $n = 2$ .
50. Prove Property 5 of vectors algebraically for the case  $n = 3$ . Then use similar triangles to give a geometric proof.
51. Use vectors to prove that the line joining the midpoints of two sides of a triangle is parallel to the third side and half its length.
52. Suppose the three coordinate planes are all mirrored and a light ray given by the vector  $\mathbf{a} = \langle a_1, a_2, a_3 \rangle$  first strikes the  $xz$ -plane, as shown in the figure. Use the fact that the angle of incidence equals the angle of reflection to show that the direction of the reflected ray is given by  $\mathbf{b} = \langle a_1, -a_2, a_3 \rangle$ . Deduce that, after being reflected by all three mutually perpendicular mirrors, the resulting ray is parallel to the initial ray. (American space scientists used this principle, together with laser beams and an array of corner mirrors on the moon, to calculate very precisely the distance from the earth to the moon.)

